

British Money

• Match the pictures of the coins to their correct names and value.

10 pence

1 pound

5 pence


1 penny

2 pounds

2 pence

50 pence

20 pence



50p

10p

£2

20p

1p

2p

5p

£1

British Money

- Write the total amount of money at the end of each row.

£

£

£

£

£

£

British Money

• Look at the pictures and answer the questions.



£ 9.99




£ 35.50




£ 80.49



90 p



£ 20.15



50 p

1. How much is the umbrella?
- It's nine pounds and ninety-nine pence.
2. How much are the shoes?
.....
3. How much are the glasses?
.....
4. How much is the banana?
.....
5. How much is the jumper?
.....
6. How much is the ruler?
.....
7. How much are five bananas?
.....
8. How much are two rulers?
.....
9. How much are two umbrellas?
.....
10. How much are two jumpers?
.....