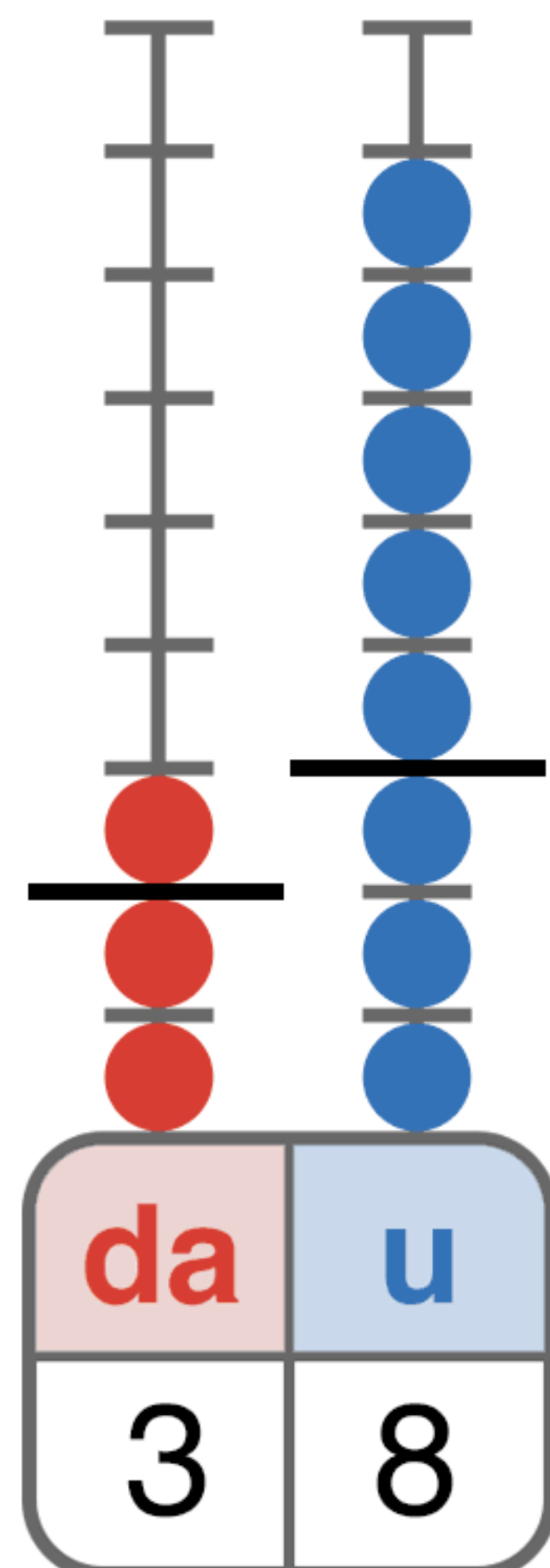


ADDIZIONI IN COLONNA

 Esegui le addizioni in colonna e poi verifica sull'abaco.

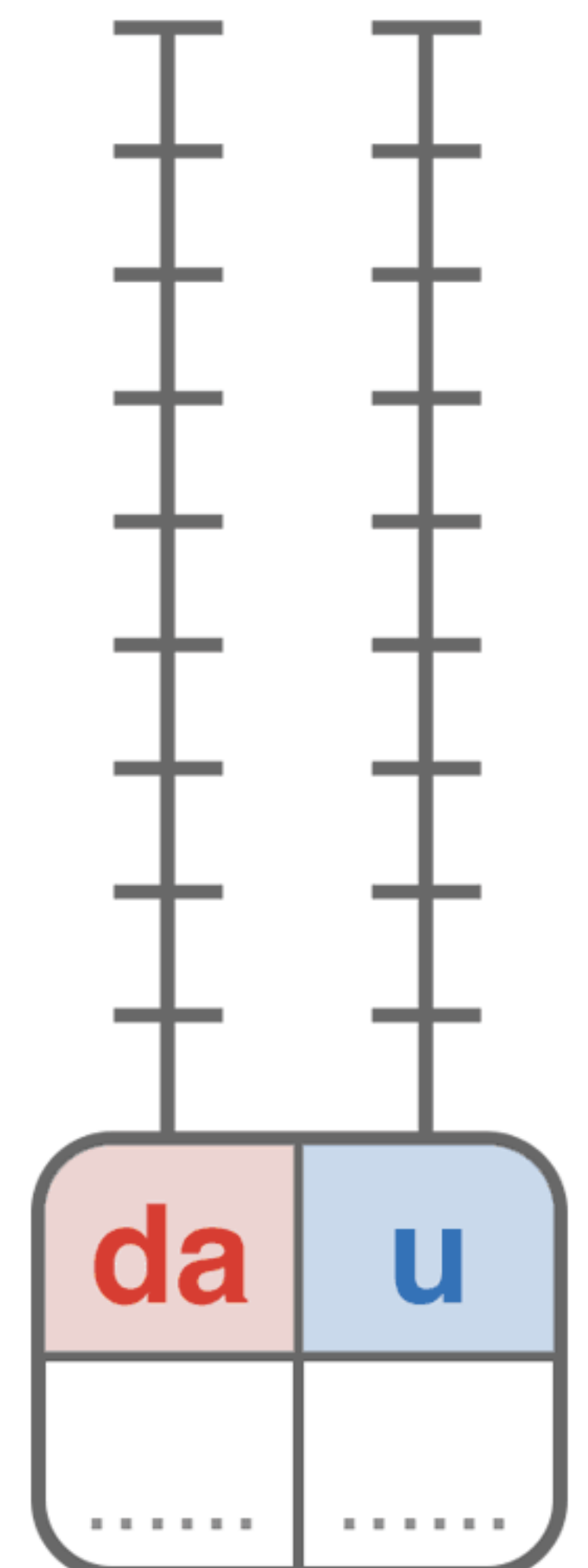
$$23 + 15 = 38$$

da	u
2	3
1	5
3	8



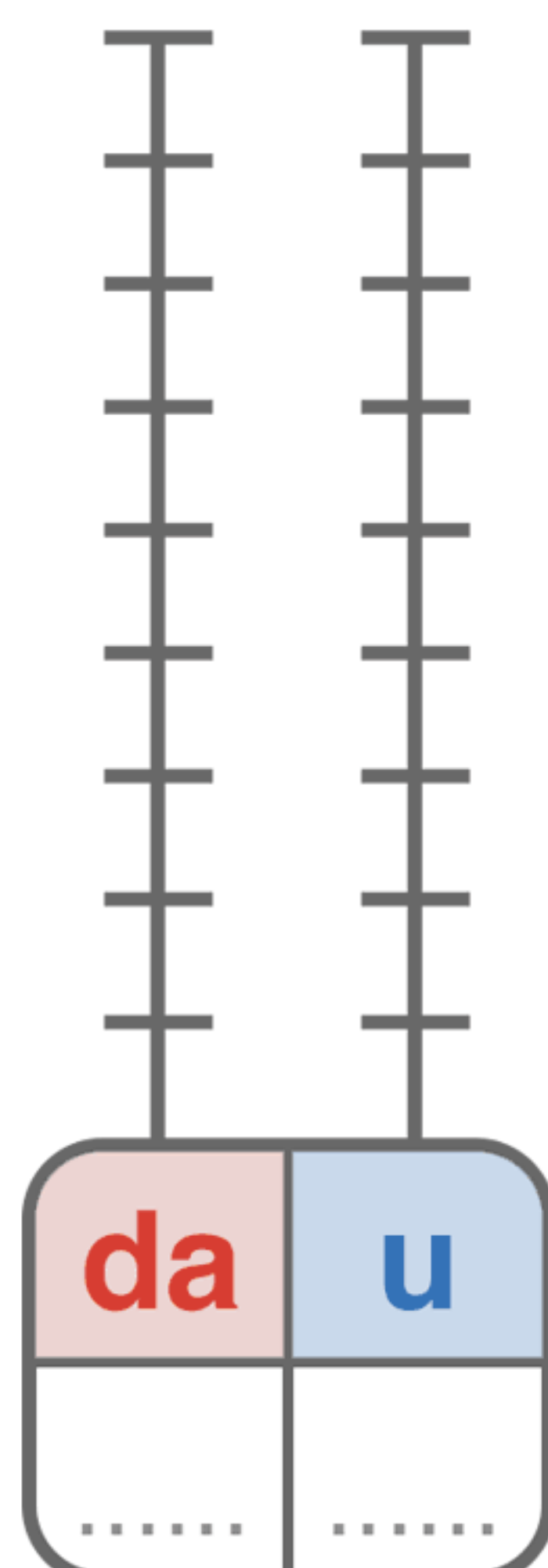
$$14 + 22 = \dots\dots$$

da	u



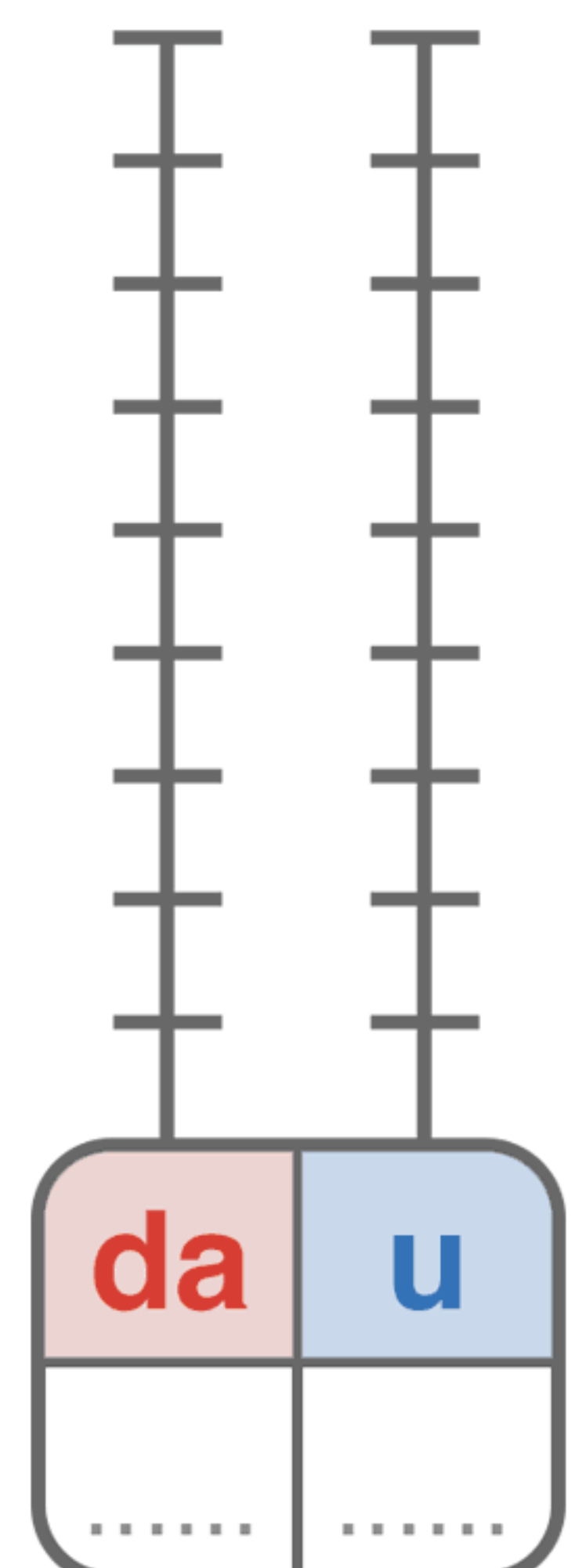
$$32 + 17 = \dots\dots$$

da	u



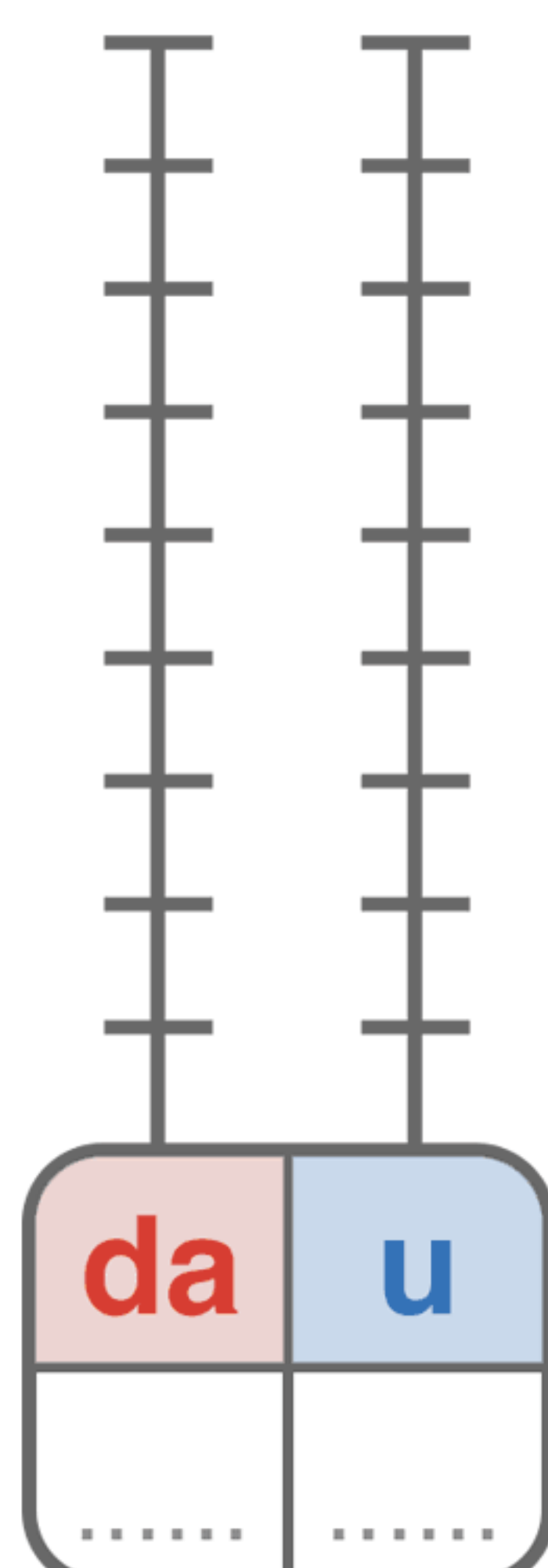
$$24 + 44 = \dots\dots$$

da	u



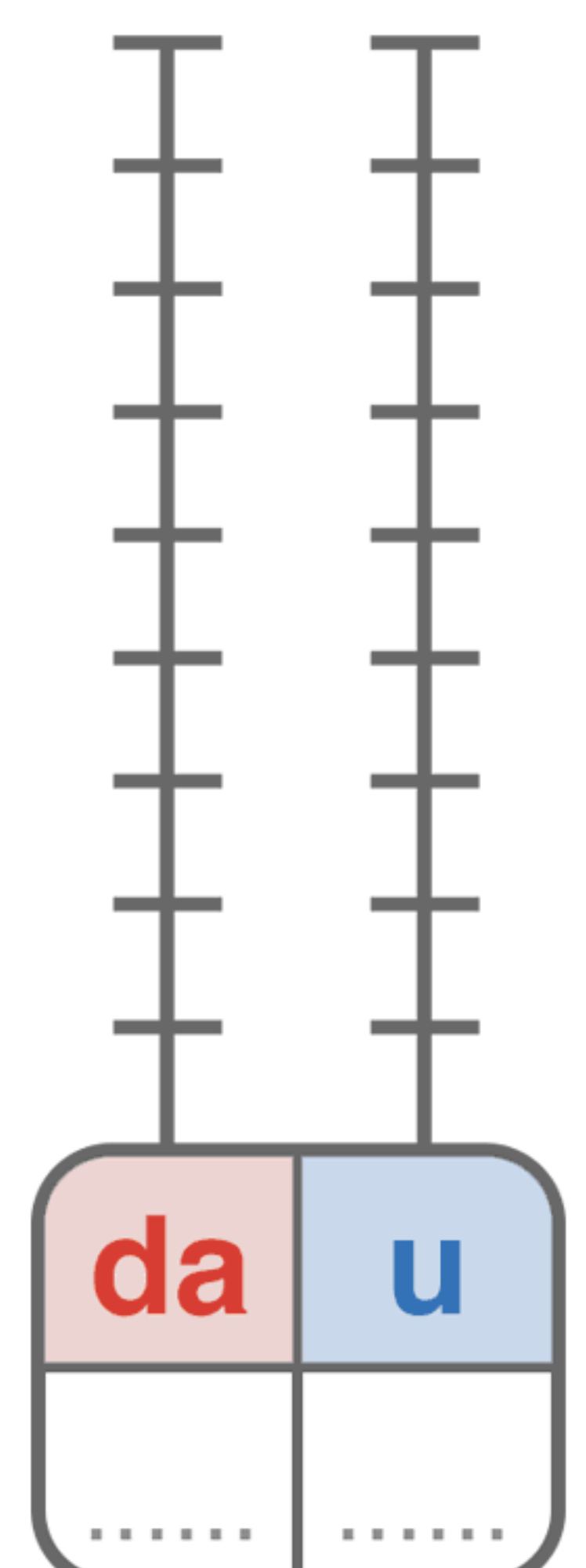
$$45 + 33 = \dots\dots$$

da	u



$$27 + 52 = \dots\dots$$

da	u



ADDIZIONI IN COLONNA

 Metti in colonna e calcola.

$12 + 35 = \dots\dots$

da	u

 $+$
 $=$

$17 + 41 = \dots\dots$

da	u

 $+$
 $=$

$40 + 29 = \dots\dots$

da	u

 $+$
 $=$

$25 + 53 = \dots\dots$

da	u

 $+$
 $=$

$72 + 20 = \dots\dots$

da	u

 $+$
 $=$

$66 + 31 = \dots\dots$

da	u

 $+$
 $=$

$53 + 33 = \dots\dots$

da	u

 $+$
 $=$

$74 + 15 = \dots\dots$

da	u

 $+$
 $=$

$30 + 50 = \dots\dots$

da	u

 $+$
 $=$

$58 + 31 = \dots\dots$

da	u

 $+$
 $=$

$11 + 76 = \dots\dots$

da	u

 $+$
 $=$

$47 + 41 = \dots\dots$

da	u

 $+$
 $=$

ADDIZIONI IN COLONNA

 Metti in colonna e calcola.

$29 + 30 = \dots\dots$

da	u

 $+$
 $=$

$67 + 32 = \dots\dots$

da	u

 $+$
 $=$

$26 + 50 = \dots\dots$

da	u

 $+$
 $=$

$14 + 55 = \dots\dots$

da	u

 $+$
 $=$

$34 + 34 = \dots\dots$

da	u

 $+$
 $=$

$19 + 80 = \dots\dots$

da	u

 $+$
 $=$

$77 + 11 = \dots\dots$

da	u

 $+$
 $=$

$44 + 34 = \dots\dots$

da	u

 $+$
 $=$

$55 + 44 = \dots\dots$

da	u

 $+$
 $=$

$62 + 21 = \dots\dots$

da	u

 $+$
 $=$

$38 + 60 = \dots\dots$

da	u

 $+$
 $=$

$46 + 42 = \dots\dots$

da	u

 $+$
 $=$