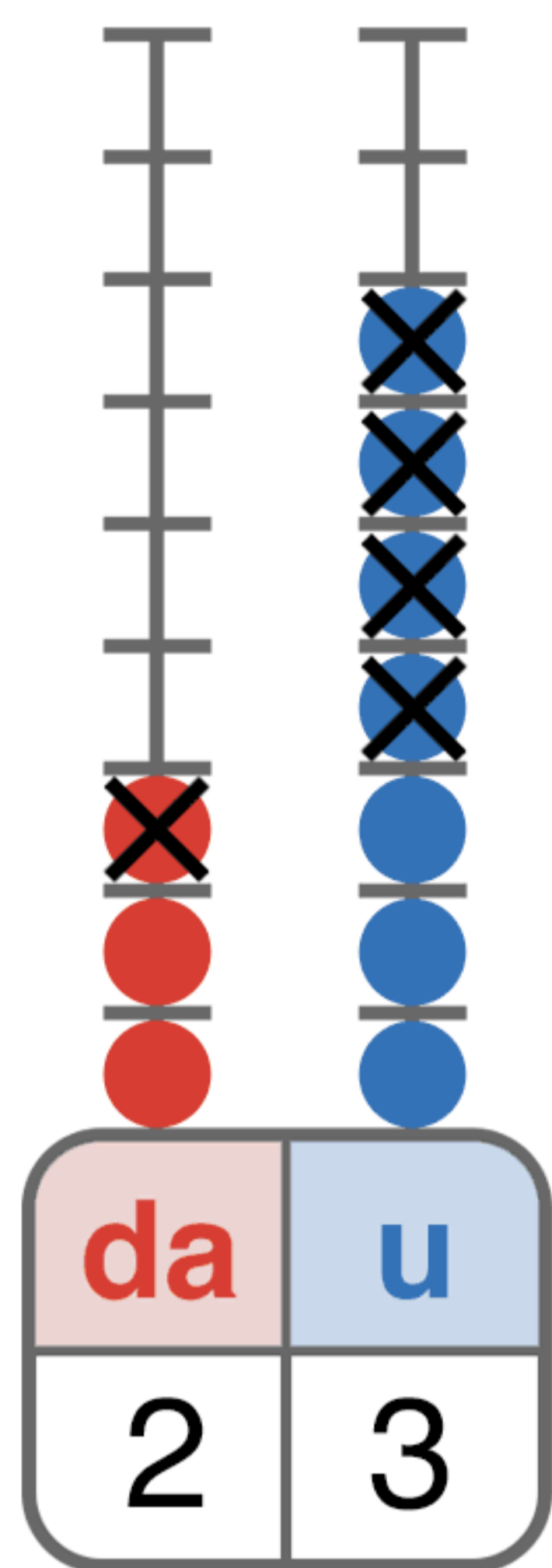


SOTTRAZIONI IN COLONNA

■ Esegui le sottrazioni in colonna e poi verifica sull'abaco.

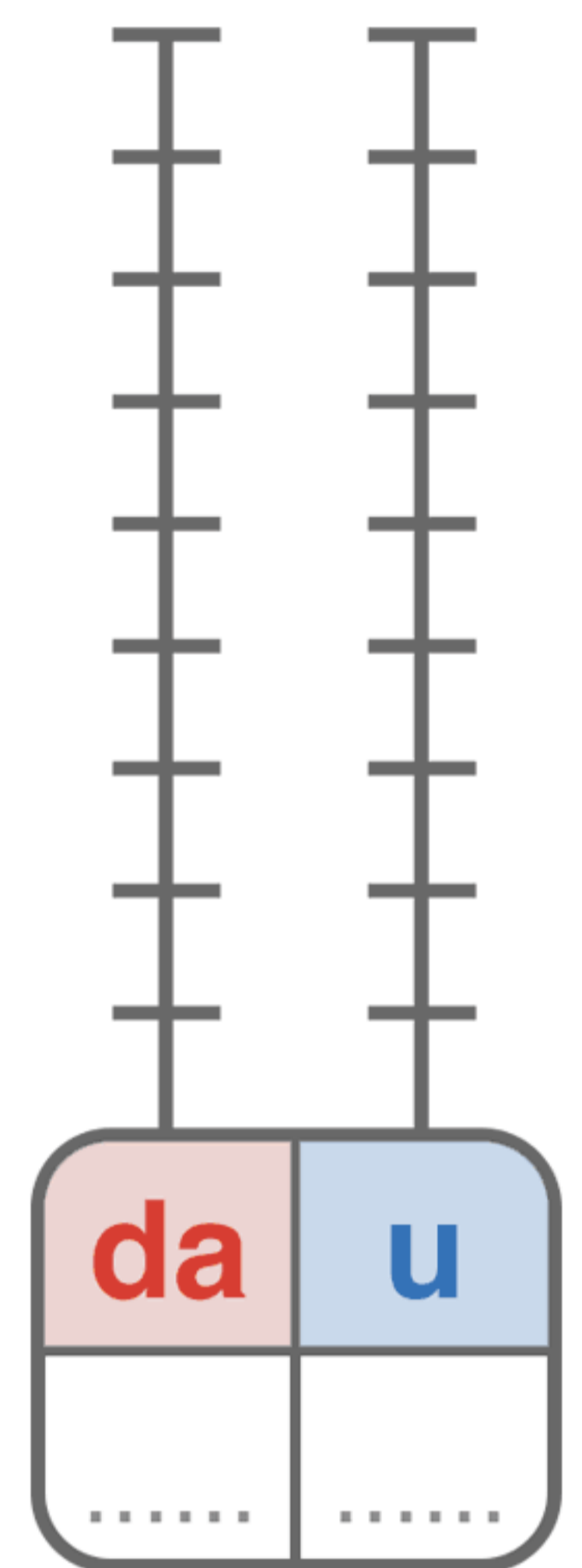
$$37 - 14 = 23$$

da	u
3	7
1	4
2	3



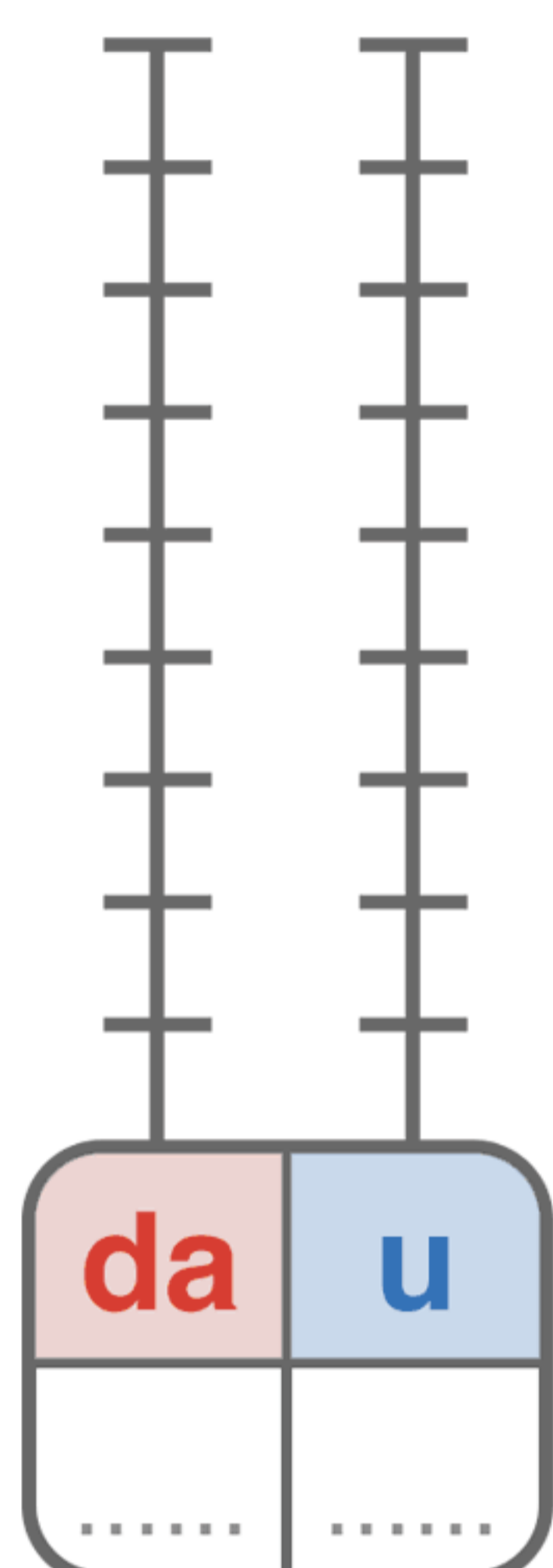
$$48 - 25 = \dots\dots$$

da	u



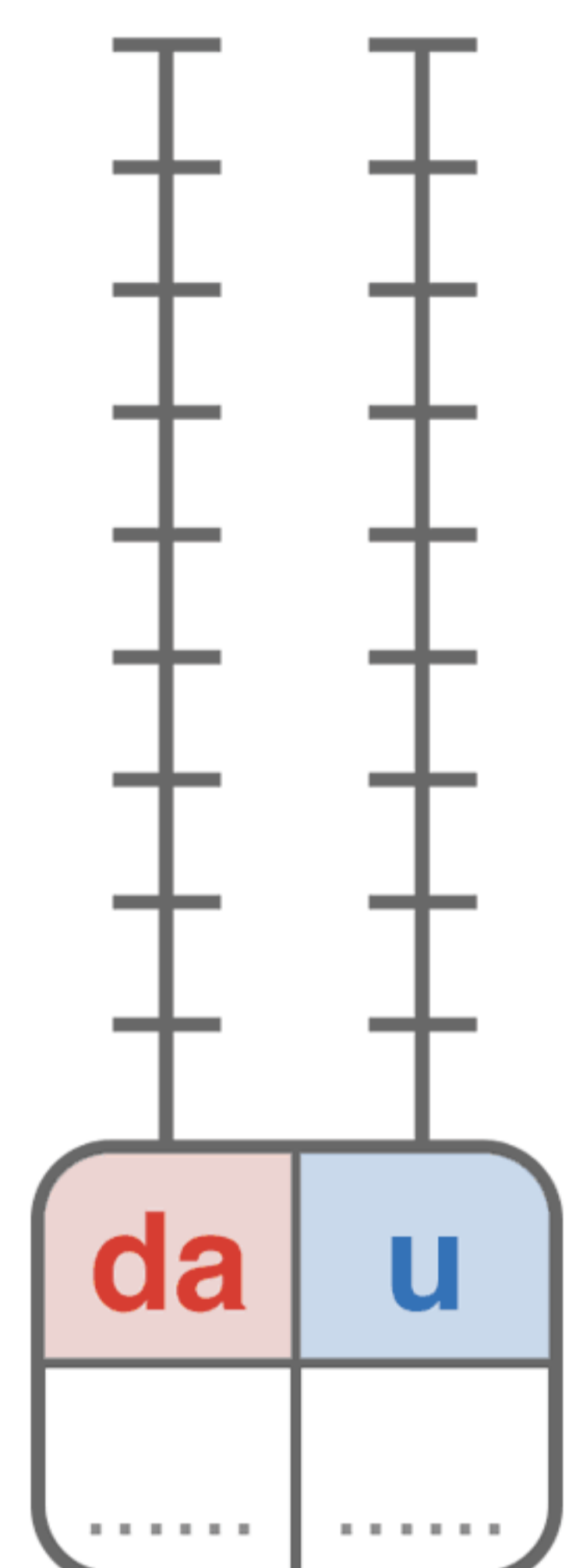
$$29 - 18 = \dots\dots$$

da	u



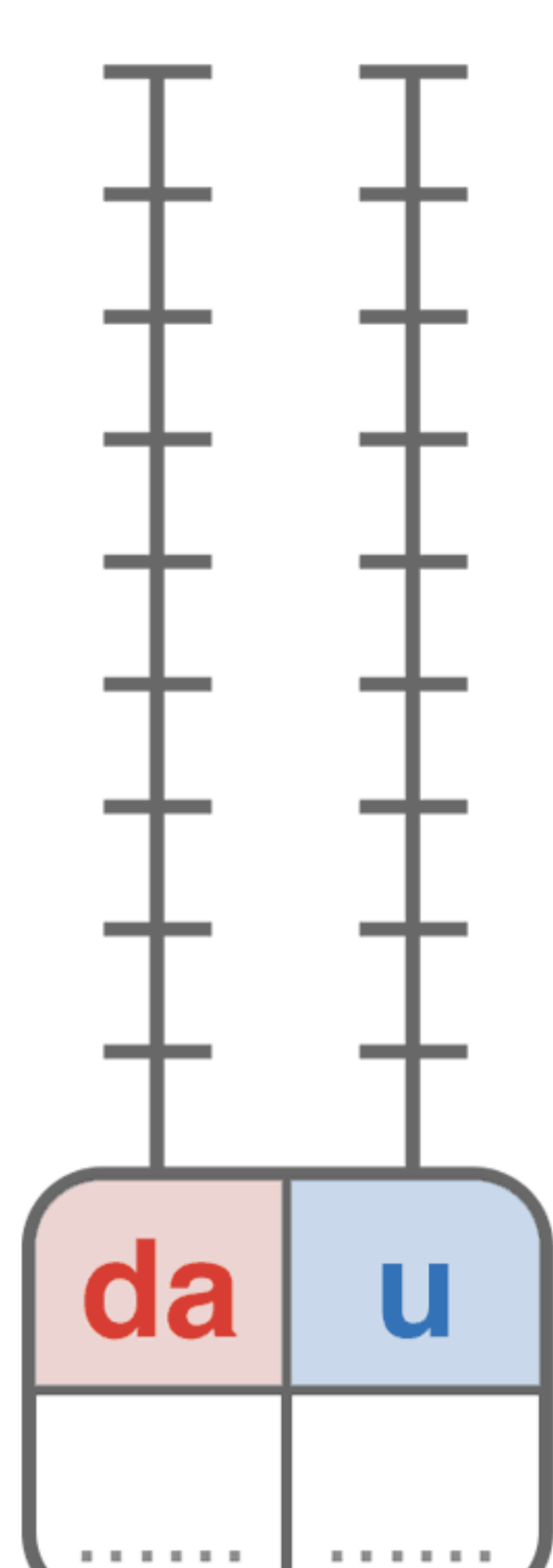
$$35 - 22 = \dots\dots$$

da	u



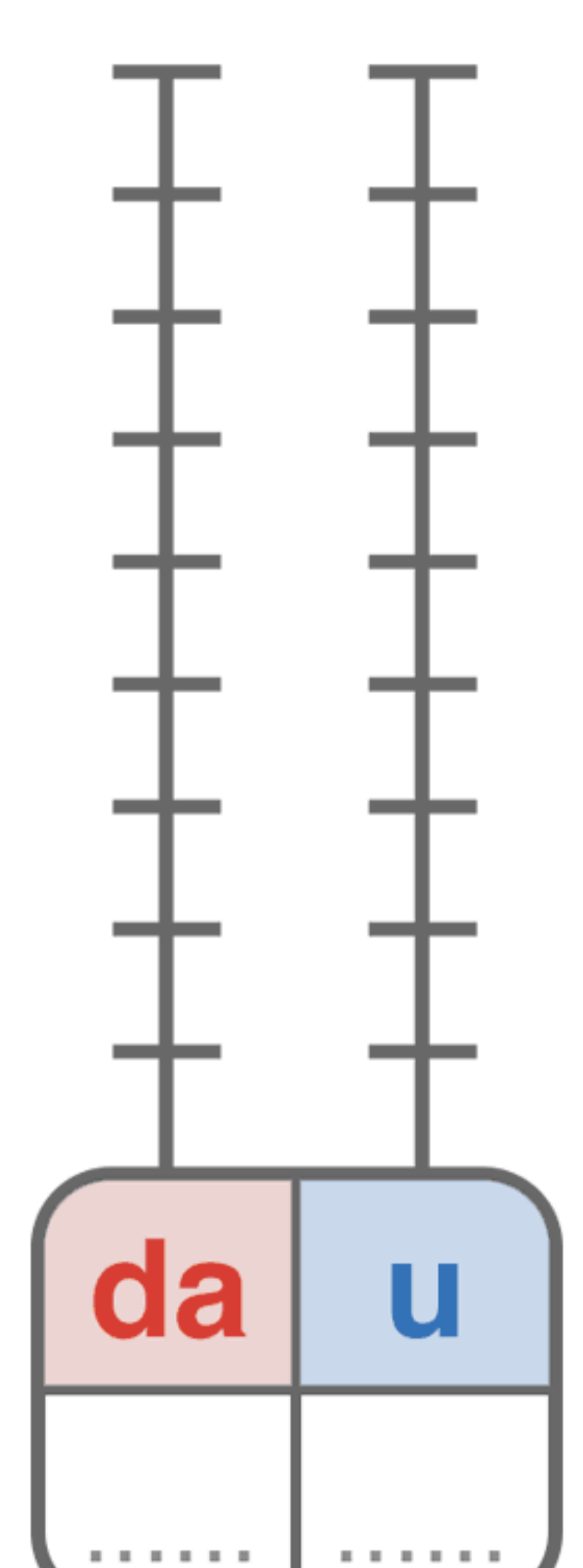
$$44 - 32 = \dots\dots$$

da	u



$$68 - 41 = \dots\dots$$

da	u



SOTTRAZIONI IN COLONNA

Metti in colonna e calcola.

$65 - 44 = \dots\dots$

da	u

-

=

$58 - 13 = \dots\dots$

da	u

-

=

$36 - 24 = \dots\dots$

da	u

-

=

$44 - 20 = \dots\dots$

da	u

-

=

$75 - 45 = \dots\dots$

da	u

-

=

$62 - 21 = \dots\dots$

da	u

-

=

$88 - 54 = \dots\dots$

da	u

-

=

$77 - 44 = \dots\dots$

da	u

-

=

$82 - 32 = \dots\dots$

da	u

-

=

$66 - 23 = \dots\dots$

da	u

-

=

$90 - 30 = \dots\dots$

da	u

-

=

$94 - 82 = \dots\dots$

da	u

-

=

SOTTRAZIONI IN COLONNA

Metti in colonna e calcola.

$85 - 33 = \dots\dots$

da	u

-

=

$49 - 23 = \dots\dots$

da	u

-

=

$78 - 54 = \dots\dots$

da	u

-

=

$89 - 66 = \dots\dots$

da	u

-

=

$61 - 31 = \dots\dots$

da	u

-

=

$79 - 47 = \dots\dots$

da	u

-

=

$83 - 72 = \dots\dots$

da	u

-

=

$97 - 55 = \dots\dots$

da	u

-

=

$55 - 20 = \dots\dots$

da	u

-

=

$68 - 43 = \dots\dots$

da	u

-

=

$99 - 73 = \dots\dots$

da	u

-

=

$93 - 33 = \dots\dots$

da	u

-

=