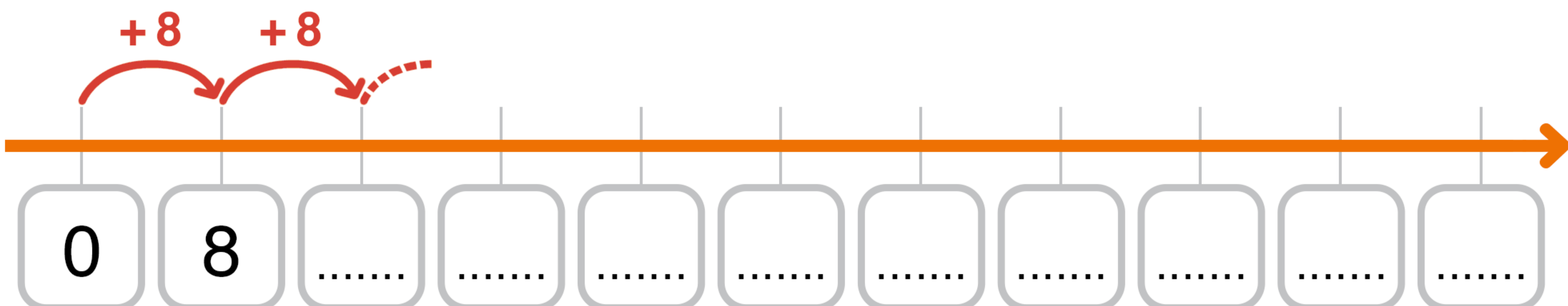












# LA TABELLINA DELL'8

Completa la linea dei numeri. Parti da 0 e fai salti da 8.



Osserva la tabellina, conta le zampe dei ragni e scrivi i risultati.

$8 \times 0 = \dots\dots$										
$8 \times 1 = \dots\dots$										
$8 \times 2 = \dots\dots$										
$8 \times 3 = \dots\dots$										
$8 \times 4 = \dots\dots$										
$8 \times 5 = \dots\dots$										
$8 \times 6 = \dots\dots$										
$8 \times 7 = \dots\dots$										
$8 \times 8 = \dots\dots$										
$8 \times 9 = \dots\dots$										
$8 \times 10 = \dots\dots$										

# LA TABELLINA DELL'8

Completa.

$\times$	0	1	2	3	4	5	6	7	8	9	10
8	0	8	.....	.....	.....	.....	.....	.....	.....	.....	.....

Colora solo i risultati che appartengono alla tabellina dell'8.

38	80	36	25	44	64	42
16	18	40	66	24	76	32
48	50	8	46	72	28	56

Collega ogni moltiplicazione al risultato corretto.

$8 \times 4 =$	24
$8 \times 8 =$	72
$8 \times 5 =$	40
$8 \times 3 =$	32
$8 \times 6 =$	64
$8 \times 9 =$	48

# LA TABELLINA DELL'8

Colora solo il risultato esatto di ogni moltiplicazione.

$8 \times 5 =$   40  48

$8 \times 1 =$   1  8

$8 \times 6 =$   42  48

$8 \times 2 =$   18  16

$8 \times 8 =$   56  64

$8 \times 3 =$   28  24

$8 \times 9 =$   72  76

$8 \times 0 =$   0  8

$8 \times 4 =$   32  36

$8 \times 7 =$   54  56

$8 \times 10 =$   72  80

Completa.

$8 \times \dots = 24$

$8 \times \dots = 40$

$8 \times \dots = 0$

$8 \times \dots = 72$

$8 \times \dots = 64$

$8 \times \dots = 56$

$8 \times \dots = 32$

$8 \times \dots = 48$

$8 \times \dots = 8$

$8 \times \dots = 16$

$8 \times \dots = 80$

Risolvi il problema.

In un acquario ci sono 7 polpi. Quanti tentacoli ci sono in totale?

